


Multiplication: With 2

Name _____ Date _____



The domino has two sides.
Each side has 3 dots.
How many dots in all?


2 groups of 3 dots

$$2 \times 3 = 6$$


6 dots in all

Multiply to find the total number of dots.


1. _____ groups of _____ dots
_____ x _____
_____ dots in all




2. _____ groups of _____ dots
_____ x _____
_____ dots in all




3. _____ groups of _____ dots
_____ x _____
_____ dots in all



4. _____ groups of _____ dots
_____ x _____
_____ dots in all



5. _____ groups of _____ dots
_____ x _____
_____ dots in all



6. _____ groups of _____ dots
_____ x _____
_____ dots in all

